


NAME: _____



MINUTE 4



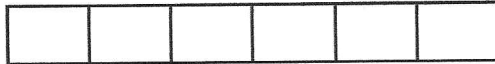
1. Circle the number with a 5 in the tenths place. 36.05 41.5 50.313 15.38

2. Which of these shapes is a trapezoid?





For Problems 3–4, write $>$, $<$, or $=$. Use the bars to help you.

3. $\frac{3}{6}$ ○ $\frac{1}{3}$



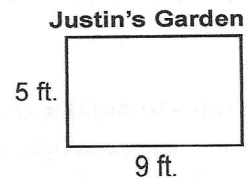
4. $\frac{1}{4}$ ○ $\frac{1}{3}$



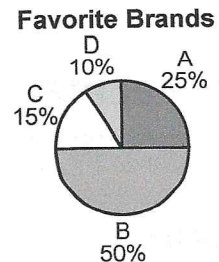
5. $2(4 + 7) =$

6. Complete the pattern. 123, 234, 345, _____.

7. Justin has 30 feet of fence. Would this be enough to surround his garden? Circle: Yes or No



8. According to the chart, Brand B was chosen twice as often as Brand _____.



9. $1 + 2 + 3 =$

$3 + 4 + 5 =$

$5 + 6 + 7 =$

10.
$$\begin{array}{r} 38 \\ + 37 \\ \hline \end{array}$$

$$\begin{array}{r} 43 \\ + 96 \\ \hline \end{array}$$

$$\begin{array}{r} 26 \\ + 57 \\ \hline \end{array}$$