



NAME: \_\_\_\_\_

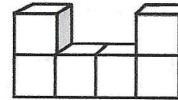


# MINUTE 3




1. If it is 5:32 now, what time will it be 24 minutes from now? \_\_\_\_\_


2. How many cubes are in this shape? \_\_\_\_\_



3. Write two fractions that represent the shaded boxes.  
\_\_\_\_\_



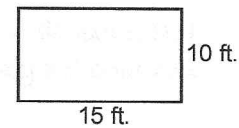
4. Write  $>$  or  $<$  in the circle to compare the fractions.



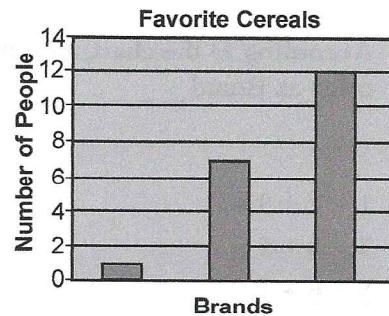
5. Mel makes arm bracelets. She is making one for each arm of her six friends. How many should she make? \_\_\_\_\_

6. Complete the pattern. 2, 4, 8, \_\_\_\_\_.

7. Joe wants to build a fence for his dog Charlie. He plans to surround the rectangle to the right with fence. How many feet will he need? \_\_\_\_\_



8. How many people took part in this survey?  
\_\_\_\_\_



9.  $(12)(3) =$

$(12)(5) =$

$(12)(6) =$

10.  $50 \div 5 =$

$55 \div 5 =$

$45 \div 5 =$